




my name:

The Mouse with the Question Mark Tail

By: Richard Peck



The Mouse with the Question Mark Tail, Chs 1-3



True or False

1. Mouse Minor is an orphan who lives with his aunts. _____
2. Mouse Minor makes friends easily. _____
3. When Princess Ena saw Mouse Minor, she loved him and tried to catch him. _____

Multiple Choice

4. The characteristic that best describes Aunt Marigold Mouse is
A) nurturing.
B) timid.
C) firm.
5. How many best friends does Mouse Minor have?
A) 0
B) 1
C) 2
6. Buckingham Palace and the Royal Mews are located in
A) Washington, DC.
B) Paris, France.
C) London, United Kingdom.

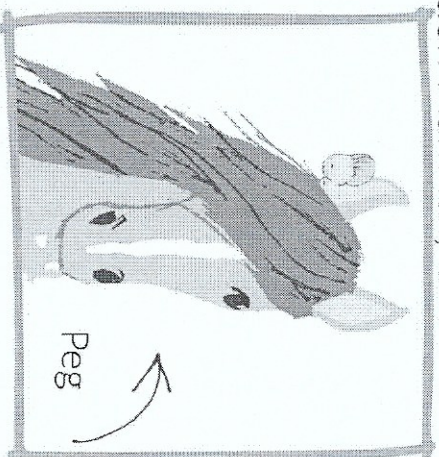
The Mouse with the Question Mark Tail, Chs 4-6

Quick Comprehension Check

True or False

1. The cat pounced and tried to eat Mouse Minor.

2. Peg told Mouse Minor he could ride in Peg's ear.



3. The Yeomice motto is, "See, don't say".

Multiple Choice

4. In chapter 4, Mouse Minor meets a new character who is a

- A) bat.
- B) horse.
- C) dog.

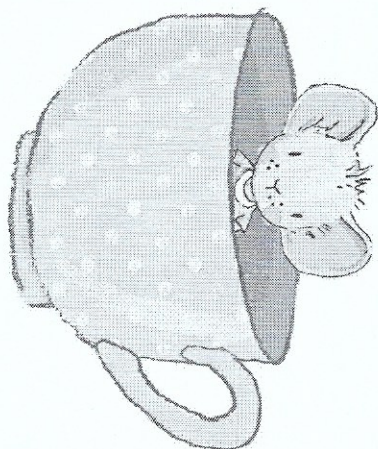
5. Another name given to squirrels is

- A) tree rats.
- B) tree mice.
- C) tree cats.

6. Mouse Minor decided to become a Yewmouse Guard because

- A) Peg asked him.
- B) he thinks it will help him find out about his past.
- C) he likes the uniform and sword.

The Mouse with the Question Mark Tail, Chs 7-9



True or False

1. Mouse Minor felt proud to be a Yeomouse.

2. For dinner, the Yeomice went to the royal garden to eat fresh vegetables.

3. Mouse Minor first met the queen while riding on her tea saucer.

Multiple Choice

4. The Yeomice Captain was
 - A) handsome yet timid.
 - B) horrific.
 - C) awe inspiring.
5. Mouse Minor suspects foul play from Ian because
 - A) Wlan said Mouse Minor's name was on the roster.
 - B) he heard Ian talking behind his back.
 - C) Ian tried to trick him and get him in trouble with the captain.
6. When Queen Victoria first sees Mouse Minor, she
 - A) shrieks and drops her tea cup.
 - B) calls for her guards.
 - C) talks to him calmly.

The Mouse with a Question Mark Tail, Chs 10-12



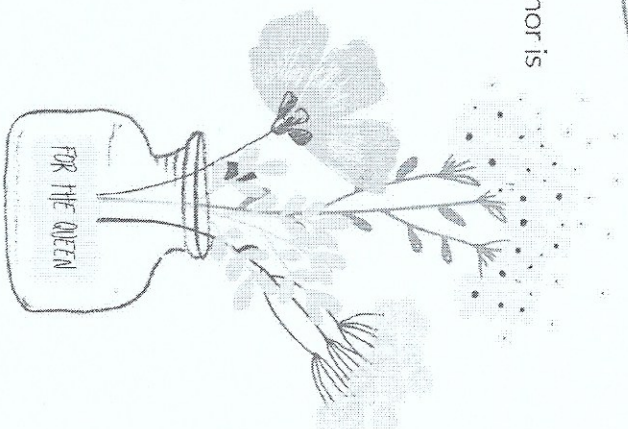
True or False

1. Queen Victoria seems to know everything. _____
2. Mouse Minor finds out his real name is Mouselangelo. _____
3. Mouse Minor finds out he is a prince. _____




Multiple Choice

4. The secret that the queen tells Mouse Minor is
A) his name.
B) that there is a Queen Mouse.
C) that she knows his parents.
5. Mouse Minor is captured again by
A) crows.
B) tree rats.
C) bats.
6. The Chancellor and Air Marshall is
A) Mouse Minor's old teacher.
B) the Queen Mouse.
C) the orange cat.



The Mouse with the Question Mark Tail, Chs 13-15

Quick Comprehension Check



True or False

1. Ludovic's father is the captain of the Yeomice.

2. Aunt Marigold moved to Buckingham Palace to live with Ludovic.

3. Ludovic chose Ian to be Mouse Equerry.

Multiple Choice

4. What finally convinces Mouse Majesty that Ludovic is her grandson?
A) Aunt Marigold
B) Ian
C) Ludovic's tail
5. If Ludovic wasn't named as the future king, who would it have been?
A) the Captain of the Yeomice
B) Bela Chiroptea
C) Prince Bruno
6. Ludovic's mother
A) died giving birth to him.
B) was banished so she couldn't take the throne.
C) is the Queen Mouse.

3rd Grade Summer Packet Review

1. Which number is missing from this sequence?

51, 55, 59, 63, __, 71

2. Which number is largest?

2,858

2,862

2,079

3. Name the place values for the number 35,901

3 _____ 5 _____ 9 _____
0 _____ 1 _____

4. A scientist believes that there are 836 brown wild horses, 283 white wild horses and 5 black wild horses. How many wild horses are there altogether?

5.
$$\begin{array}{r} 415 \\ - 77 \\ \hline \end{array}$$


6. $20 \div 4 =$ _____

7. $27 \div 9 =$ _____

8. What is 718 rounded to the nearest hundred? _____

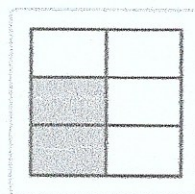
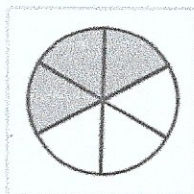


9. What is 18 rounded to the nearest ten? _____

10. What time does the clock show?



_____ : _____

11. Which shape shows the fraction $\frac{3}{6}$?



12. What fraction does the number line show? _____

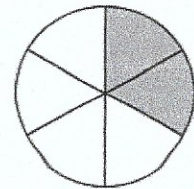


13. Which is a better estimate for the length of a watermelon?

14 inches

14 yards

14. What is the equivalent fraction?



$$\frac{2}{6} = \frac{\boxed{}}{3}$$

15. Which is a better estimate for the length of a snail?

4 meters

4 centimeters